



RIDE Rhode Island
Department
of Education

*Release of Spring 2022
RICAS Test Items*

from the

*Grade 3 Mathematics
Paper-Based Test*

June 2022
Rhode Island Department of Education



This document was prepared by the
Rhode Island Department of Elementary and Secondary Education
Angélica M. Infante-Green
Commissioner

© 2022 Massachusetts Department of Elementary and Secondary Education
*Permission is hereby granted to copy for non-commercial educational purposes any or all parts of
this document with the exception of English Language Arts passages that are not designated as in
the public domain. Permission to copy all other passages must be obtained from the copyright holder.
Please credit the "Massachusetts Department of Elementary and Secondary Education."*

Rhode Island Department of Elementary and Secondary Education
255 Westminster Street, Providence, RI 02903
Phone 401-222-4600
<http://www.ride.ri.gov/>

Overview of Grade 3 Mathematics Test

The spring 2022 grade 3 Mathematics test was a next-generation assessment that was administered in two primary formats: a computer-based version and a paper-based version. The vast majority of students took the computer-based test. The paper-based test was offered as an accommodation for students with disabilities who are unable to use a computer, as well as for English learners who are new to the country and are unfamiliar with technology.

Most of the operational items on the grade 3 Mathematics test were the same, regardless of whether a student took the computer-based version or the paper-based version. In places where a technology-enhanced item was used on the computer-based test, an adapted version of the item was created for use on the paper test. These adapted paper items were multiple-choice, multiple-select, or short-answer items that tested the same Mathematics content and assessed the same standard as the technology-enhanced item.

This document displays released items from the paper-based test. Released items from the computer-based test are available on the RICAS Resource Center website at ricas.pearsonsupport.com/released-items.

The Scoring Guides can be found at www.doe.mass.edu/mcas/student/. They provide the released constructed-response questions, a unique scoring guide for each question, and samples of student work at each score point.

Test Sessions and Content Overview

The grade 3 Mathematics test was made up of two separate test sessions. Each session included selected-response, short-answer, and constructed-response questions. On the paper-based test, the selected-response questions were multiple-choice items and multiple-select items, in which students select the correct answer(s) from among several answer options.

Standards and Reporting Categories

The grade 3 Mathematics test was based on standards in the five domains for grade 3 in the *Massachusetts Curriculum Framework for Mathematics* (2017). The five domains are listed below.

- Operations and Algebraic Thinking
- Number and Operations in Base Ten
- Number and Operations—Fractions
- Measurement and Data
- Geometry

The *Massachusetts Curriculum Framework* is strongly aligned with Rhode Island’s Mathematics standards: the Common Core State Standards (CCSS). The RICAS Mathematics assessment tables articulate this alignment and are available on the RIDE website at www.ride.ri.gov/ricas. The *Massachusetts Curriculum Framework for Mathematics* is available on the Department website at www.doe.mass.edu/frameworks/current.html.

Mathematics test results are reported under five MCAS reporting categories, which are identical to the five framework domains listed above.

The tables at the conclusion of this document provide the following information about each released and unreleased operational item: reporting category, standard(s) covered, item type, and item description. The correct answers for released selected-response and short-answer questions are also displayed in the released item table.

Reference Materials and Tools

Each student taking the paper-based version of the grade 3 Mathematics test was provided with a plastic ruler. An image of the ruler is not reproduced in this document.

During both Mathematics test sessions, the use of bilingual word-to-word dictionaries was allowed for current and former English learner students only. No calculators, other reference tools, or materials were allowed.

Grade 3 Mathematics

SESSION 1

This session contains 9 questions.

You may **not** use a calculator during this session.



Directions

Read each question carefully and then answer it as well as you can. You must record all answers in this Test & Answer Booklet.

For some questions, you will mark your answers by filling in the circles in your Test & Answer Booklet. Make sure you darken the circles completely. Do not make any marks outside of the circles. If you need to change an answer, be sure to erase your first answer completely.

For other questions, you will need to fill in an answer grid. Directions for completing questions with answer grids are provided on the next page.

If a question asks you to show or explain your work, you must do so to receive full credit. Write your response in the space provided. Only responses written within the provided space will be scored.

Directions for Completing Questions with Answer Grids

1. Work the question and find an answer.
2. Enter your answer in the answer boxes at the top of the answer grid.
3. Print only one number or symbol in each box. Do not leave a blank box in the middle of an answer.
4. Under each answer box, fill in the circle that matches the number or symbol you wrote above. Make a solid mark that completely fills the circle.
5. Do not fill in a circle under an unused answer box.
6. If you need to change an answer, be sure to erase your first answer completely.
7. See below for examples of how to correctly complete an answer grid.

EXAMPLES

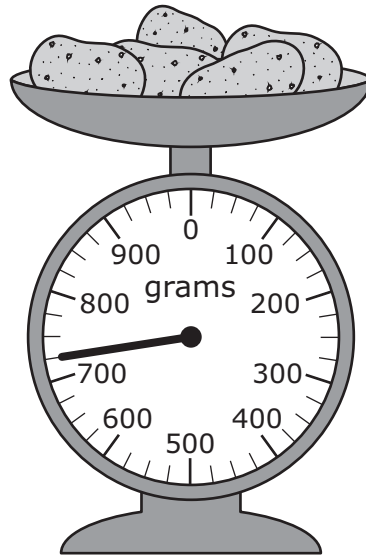
0	.	4	3	2	
<input type="radio"/>	<input checked="" type="radio"/>	<input type="radio"/>	<input type="radio"/>	<input type="radio"/>	<input type="radio"/>
<input checked="" type="radio"/>	0	0	0	0	0
1	1	1	1	1	1
2	2	2	2	<input checked="" type="radio"/>	2
3	3	3	<input checked="" type="radio"/>	3	3
4	4	<input checked="" type="radio"/>	4	4	4
5	5	5	5	5	5
6	6	6	6	6	6
7	7	7	7	7	7
8	8	8	8	8	8
9	9	9	9	9	9

		.	2	5	
<input type="radio"/>	<input type="radio"/>	<input checked="" type="radio"/>	<input type="radio"/>	<input type="radio"/>	<input type="radio"/>
0	0	0	0	0	0
1	1	1	1	1	1
2	2	2	<input checked="" type="radio"/>	2	2
3	3	3	3	3	3
4	4	4	4	4	4
5	5	5	5	<input checked="" type="radio"/>	5
6	6	6	6	6	6
7	7	7	7	7	7
8	8	8	8	8	8
9	9	9	9	9	9

			4	3	8
<input type="radio"/>	<input type="radio"/>	<input type="radio"/>	<input type="radio"/>	<input type="radio"/>	<input type="radio"/>
0	0	0	0	0	0
1	1	1	1	1	1
2	2	2	2	2	2
3	3	3	3	<input checked="" type="radio"/>	3
4	4	4	<input checked="" type="radio"/>	4	4
5	5	5	5	5	5
6	6	6	6	6	6
7	7	7	7	7	7
8	8	8	8	8	<input checked="" type="radio"/>
9	9	9	9	9	9

6	8	1	9		
<input type="radio"/>	<input type="radio"/>	<input type="radio"/>	<input type="radio"/>	<input type="radio"/>	<input type="radio"/>
0	0	0	0	0	0
1	1	<input checked="" type="radio"/>	1	1	1
2	2	2	2	2	2
3	3	3	3	3	3
4	4	4	4	4	4
5	5	5	5	5	5
<input checked="" type="radio"/>	6	6	6	6	6
7	7	7	7	7	7
8	<input checked="" type="radio"/>	8	8	8	8
9	9	9	<input checked="" type="radio"/>	9	9

- 1 This scale shows the mass of some potatoes.



What is the total mass, in grams, of the potatoes?

- Ⓐ 700 grams
- Ⓑ 725 grams
- Ⓒ 750 grams
- Ⓓ 775 grams

- 2 A coach used this equation to solve a problem.

$$36 \div 9 = p$$

Which of these could be the problem the coach solved?

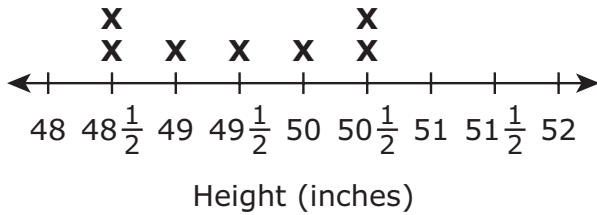
- Ⓐ There were 36 players on each team. There were 9 teams. What was the total number of players on all the teams?
- Ⓑ There were 36 players on a team. Then, 9 players left the team. What is the total number of players on the team now?
- Ⓒ There were 36 players on a team. Then, 9 players joined the team. What is the total number of players on the team now?
- Ⓓ There were 36 players on a team. The players were split equally into 9 groups. What was the total number of players in each group?

- 3 The heights, in inches, of eight students are shown in this list.

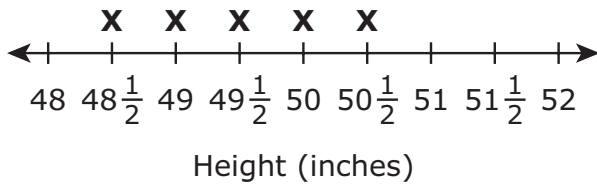
$$48\frac{1}{2}, 50\frac{1}{2}, 49, 50\frac{1}{2}, 50, 48\frac{1}{2}, 49\frac{1}{2}, 50$$

Which line plot shows the heights, in inches, of all the students?

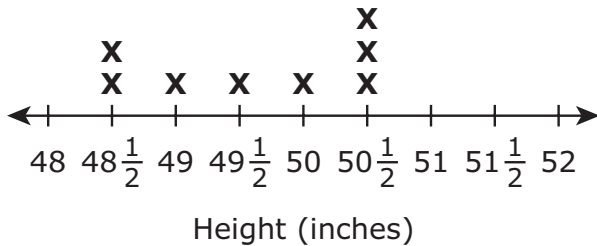
(A) **Student Heights**



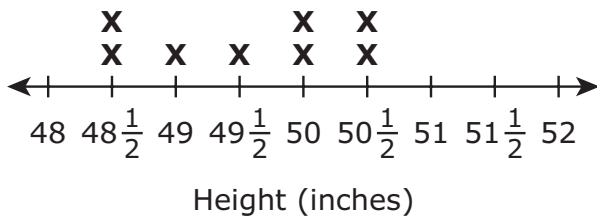
(B) **Student Heights**



(C) **Student Heights**



(D) **Student Heights**



4 Which of these statements are correct?

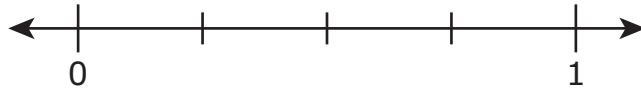
Select the **three** correct answers.

- Ⓐ The number 324 rounded to the nearest hundred is 300.
- Ⓑ The number 324 rounded to the nearest hundred is 400.
- Ⓒ The number 186 rounded to the nearest hundred is 100.
- Ⓓ The number 186 rounded to the nearest hundred is 200.
- Ⓔ The number 242 rounded to the nearest hundred is 200.
- Ⓕ The number 242 rounded to the nearest hundred is 300.

This question has three parts.

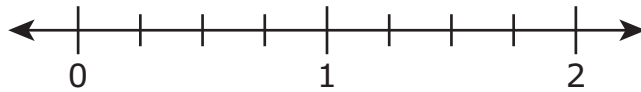
5 Part A

Plot the point that represents the location of $\frac{1}{4}$ on this number line.



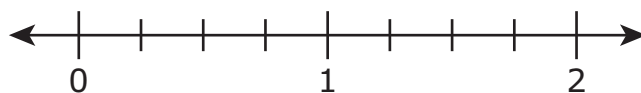
Part B

Plot the point that represents the location of $\frac{3}{4}$ on this number line.



Part C

Plot the point that represents the location of $\frac{7}{4}$ on this number line **and** explain how you know your answer is correct.



Enter your explanation in the space provided.

6 Which of these equations are true?

Select the **three** correct answers.

Ⓐ $9 \times 8 = 72$

Ⓑ $9 \times 7 = 72$

Ⓒ $35 \div 5 = 8$

Ⓓ $35 \div 5 = 7$

Ⓔ $9 \times 7 = 56$

Ⓕ $8 \times 7 = 56$

7 Which of these fractions is equivalent to the number 4?

Ⓐ $\frac{1}{1}$

Ⓑ $\frac{4}{1}$

Ⓒ $\frac{1}{4}$

Ⓓ $\frac{4}{4}$

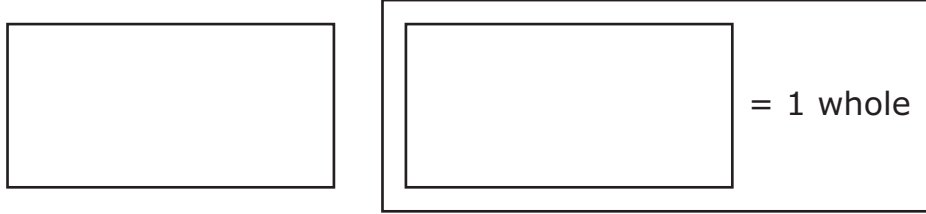
- 8 A student used multiplication to solve this division equation.

$$18 \div 3 = n$$

Which multiplication equation could the student have used to solve the division equation?

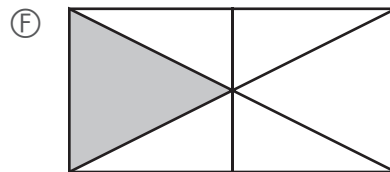
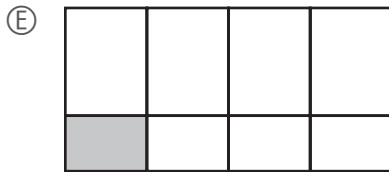

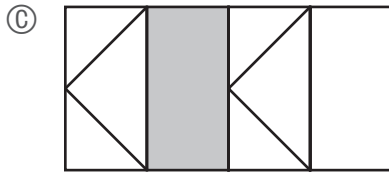
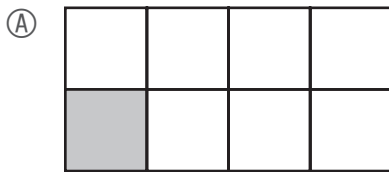
- Ⓐ $18 \times 3 = n$
- Ⓑ $n \times 18 = 3$
- Ⓒ $n = 3 \times 18$
- Ⓓ $18 = 3 \times n$

- 9 A student will shade $\frac{1}{8}$ of this figure.



Which of these models have a shaded part that is $\frac{1}{8}$ the area of the whole figure?

Select the **two** correct answers.



Grade 3 Mathematics

SESSION 2

This session contains 11 questions.

You may **not** use a calculator during this session.



Directions

Read each question carefully and then answer it as well as you can. You must record all answers in this Test & Answer Booklet.

For some questions, you will mark your answers by filling in the circles in your Test & Answer Booklet. Make sure you darken the circles completely. Do not make any marks outside of the circles. If you need to change an answer, be sure to erase your first answer completely.

For other questions, you will need to fill in an answer grid. Directions for completing questions with answer grids are provided on the next page.

If a question asks you to show or explain your work, you must do so to receive full credit. Write your response in the space provided. Only responses written within the provided space will be scored.

Directions for Completing Questions with Answer Grids

1. Work the question and find an answer.
2. Enter your answer in the answer boxes at the top of the answer grid.
3. Print only one number or symbol in each box. Do not leave a blank box in the middle of an answer.
4. Under each answer box, fill in the circle that matches the number or symbol you wrote above. Make a solid mark that completely fills the circle.
5. Do not fill in a circle under an unused answer box.
6. If you need to change an answer, be sure to erase your first answer completely.
7. See below for examples of how to correctly complete an answer grid.

EXAMPLES

0	.	4	3	2	
<input checked="" type="radio"/>	<input type="radio"/>	<input type="radio"/>	<input type="radio"/>	<input type="radio"/>	<input type="radio"/>
<input checked="" type="radio"/>	<input type="radio"/>	<input type="radio"/>	<input type="radio"/>	<input type="radio"/>	<input type="radio"/>
<input type="radio"/>	<input type="radio"/>	<input type="radio"/>	<input type="radio"/>	<input type="radio"/>	<input type="radio"/>
<input type="radio"/>	<input type="radio"/>	<input type="radio"/>	<input type="radio"/>	<input checked="" type="radio"/>	<input type="radio"/>
<input type="radio"/>	<input type="radio"/>	<input checked="" type="radio"/>	<input type="radio"/>	<input type="radio"/>	<input type="radio"/>
<input type="radio"/>	<input type="radio"/>	<input type="radio"/>	<input checked="" type="radio"/>	<input type="radio"/>	<input type="radio"/>
<input type="radio"/>	<input type="radio"/>	<input type="radio"/>	<input type="radio"/>	<input type="radio"/>	<input type="radio"/>
<input type="radio"/>	<input type="radio"/>	<input type="radio"/>	<input type="radio"/>	<input type="radio"/>	<input type="radio"/>
<input type="radio"/>	<input type="radio"/>	<input type="radio"/>	<input type="radio"/>	<input type="radio"/>	<input type="radio"/>
<input type="radio"/>	<input type="radio"/>	<input type="radio"/>	<input type="radio"/>	<input type="radio"/>	<input type="radio"/>
<input type="radio"/>	<input type="radio"/>	<input type="radio"/>	<input type="radio"/>	<input type="radio"/>	<input type="radio"/>
<input type="radio"/>	<input type="radio"/>	<input type="radio"/>	<input type="radio"/>	<input type="radio"/>	<input type="radio"/>
<input type="radio"/>	<input type="radio"/>	<input type="radio"/>	<input type="radio"/>	<input type="radio"/>	<input type="radio"/>

		.	2	5	
<input type="radio"/>	<input type="radio"/>	<input checked="" type="radio"/>	<input type="radio"/>	<input type="radio"/>	<input type="radio"/>
<input type="radio"/>	<input type="radio"/>	<input type="radio"/>	<input type="radio"/>	<input type="radio"/>	<input type="radio"/>
<input type="radio"/>	<input type="radio"/>	<input type="radio"/>	<input type="radio"/>	<input type="radio"/>	<input type="radio"/>
<input type="radio"/>	<input type="radio"/>	<input type="radio"/>	<input checked="" type="radio"/>	<input type="radio"/>	<input type="radio"/>
<input type="radio"/>	<input type="radio"/>	<input type="radio"/>	<input type="radio"/>	<input type="radio"/>	<input type="radio"/>
<input type="radio"/>	<input type="radio"/>	<input type="radio"/>	<input type="radio"/>	<input type="radio"/>	<input type="radio"/>
<input type="radio"/>	<input type="radio"/>	<input type="radio"/>	<input type="radio"/>	<input type="radio"/>	<input type="radio"/>
<input type="radio"/>	<input type="radio"/>	<input type="radio"/>	<input type="radio"/>	<input checked="" type="radio"/>	<input type="radio"/>
<input type="radio"/>	<input type="radio"/>	<input type="radio"/>	<input type="radio"/>	<input type="radio"/>	<input type="radio"/>
<input type="radio"/>	<input type="radio"/>	<input type="radio"/>	<input type="radio"/>	<input type="radio"/>	<input type="radio"/>
<input type="radio"/>	<input type="radio"/>	<input type="radio"/>	<input type="radio"/>	<input type="radio"/>	<input type="radio"/>
<input type="radio"/>	<input type="radio"/>	<input type="radio"/>	<input type="radio"/>	<input type="radio"/>	<input type="radio"/>
<input type="radio"/>	<input type="radio"/>	<input type="radio"/>	<input type="radio"/>	<input type="radio"/>	<input type="radio"/>
<input type="radio"/>	<input type="radio"/>	<input type="radio"/>	<input type="radio"/>	<input type="radio"/>	<input type="radio"/>

			4	3	8
<input type="radio"/>	<input type="radio"/>	<input type="radio"/>	<input type="radio"/>	<input type="radio"/>	<input type="radio"/>
<input type="radio"/>	<input type="radio"/>	<input type="radio"/>	<input type="radio"/>	<input type="radio"/>	<input type="radio"/>
<input type="radio"/>	<input type="radio"/>	<input type="radio"/>	<input type="radio"/>	<input type="radio"/>	<input type="radio"/>
<input type="radio"/>	<input type="radio"/>	<input type="radio"/>	<input type="radio"/>	<input checked="" type="radio"/>	<input type="radio"/>
<input type="radio"/>	<input type="radio"/>	<input type="radio"/>	<input checked="" type="radio"/>	<input type="radio"/>	<input type="radio"/>
<input type="radio"/>	<input type="radio"/>	<input type="radio"/>	<input type="radio"/>	<input type="radio"/>	<input type="radio"/>
<input type="radio"/>	<input type="radio"/>	<input type="radio"/>	<input type="radio"/>	<input type="radio"/>	<input type="radio"/>
<input type="radio"/>	<input type="radio"/>	<input type="radio"/>	<input type="radio"/>	<input type="radio"/>	<input type="radio"/>
<input type="radio"/>	<input type="radio"/>	<input type="radio"/>	<input type="radio"/>	<input type="radio"/>	<input type="radio"/>
<input type="radio"/>	<input type="radio"/>	<input type="radio"/>	<input type="radio"/>	<input type="radio"/>	<input type="radio"/>
<input type="radio"/>	<input type="radio"/>	<input type="radio"/>	<input type="radio"/>	<input type="radio"/>	<input type="radio"/>
<input type="radio"/>	<input type="radio"/>	<input type="radio"/>	<input type="radio"/>	<input type="radio"/>	<input checked="" type="radio"/>
<input type="radio"/>	<input type="radio"/>	<input type="radio"/>	<input type="radio"/>	<input type="radio"/>	<input type="radio"/>
<input type="radio"/>	<input type="radio"/>	<input type="radio"/>	<input type="radio"/>	<input type="radio"/>	<input type="radio"/>

6	8	1	9		
<input type="radio"/>	<input type="radio"/>	<input type="radio"/>	<input type="radio"/>	<input type="radio"/>	<input type="radio"/>
<input type="radio"/>	<input type="radio"/>	<input type="radio"/>	<input type="radio"/>	<input type="radio"/>	<input type="radio"/>
<input type="radio"/>	<input type="radio"/>	<input checked="" type="radio"/>	<input type="radio"/>	<input type="radio"/>	<input type="radio"/>
<input type="radio"/>	<input type="radio"/>	<input type="radio"/>	<input type="radio"/>	<input type="radio"/>	<input type="radio"/>
<input type="radio"/>	<input type="radio"/>	<input type="radio"/>	<input type="radio"/>	<input type="radio"/>	<input type="radio"/>
<input type="radio"/>	<input type="radio"/>	<input type="radio"/>	<input type="radio"/>	<input type="radio"/>	<input type="radio"/>
<input type="radio"/>	<input type="radio"/>	<input type="radio"/>	<input type="radio"/>	<input type="radio"/>	<input type="radio"/>
<input checked="" type="radio"/>	<input type="radio"/>	<input type="radio"/>	<input type="radio"/>	<input type="radio"/>	<input type="radio"/>
<input type="radio"/>	<input checked="" type="radio"/>	<input type="radio"/>	<input type="radio"/>	<input type="radio"/>	<input type="radio"/>
<input type="radio"/>	<input type="radio"/>	<input type="radio"/>	<input type="radio"/>	<input type="radio"/>	<input type="radio"/>
<input type="radio"/>	<input type="radio"/>	<input type="radio"/>	<input checked="" type="radio"/>	<input type="radio"/>	<input type="radio"/>
<input type="radio"/>	<input type="radio"/>	<input type="radio"/>	<input type="radio"/>	<input type="radio"/>	<input type="radio"/>
<input type="radio"/>	<input type="radio"/>	<input type="radio"/>	<input type="radio"/>	<input type="radio"/>	<input type="radio"/>

- 10** A science class collected rocks in a park. The students put all of the rocks into 5 buckets. They put 70 rocks into each bucket.

What was the total number of rocks the students collected?

- Ⓐ 350 rocks
- Ⓑ 280 rocks
- Ⓒ 35 rocks
- Ⓓ 14 rocks

- 11 The first four numbers in a pattern are shown.

84, 76, 68, 60, ?

What is the next number in the pattern?

Enter your answer in the answer boxes at the top of the answer grid **and** completely fill the matching circles.

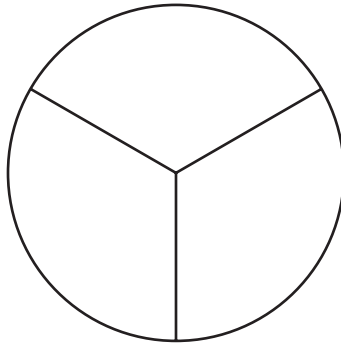
○	○	○	○	○	○
0	0	0	0	0	0
1	1	1	1	1	1
2	2	2	2	2	2
3	3	3	3	3	3
4	4	4	4	4	4
5	5	5	5	5	5
6	6	6	6	6	6
7	7	7	7	7	7
8	8	8	8	8	8
9	9	9	9	9	9

- 12 Cups of coffee were served at a parent meeting at a school. The number of cups served, rounded to the nearest **hundred**, was 200.

Which of these numbers could be the **actual** number of cups of coffee served?

Select the **two** correct answers.

- (A) 109
 - (B) 267
 - (C) 152
 - (D) 254
 - (E) 231
- 13 A circle is divided into equal parts, as shown.



Which fraction of the area of the whole circle is one part?

- (A) $\frac{1}{3}$
- (B) $\frac{2}{3}$
- (C) $\frac{3}{3}$
- (D) $\frac{4}{3}$

- 14 Four fractions are shown in the box.

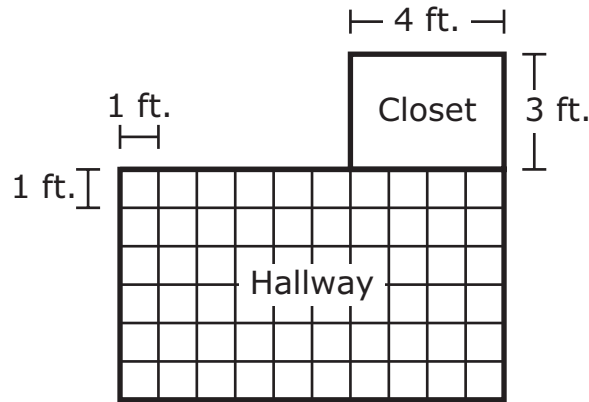
$\frac{2}{4}$	$\frac{2}{6}$	$\frac{3}{6}$	$\frac{4}{8}$
---------------	---------------	---------------	---------------

Which fraction in the box is **not** equal to the other fractions in the box?

- Ⓐ $\frac{2}{4}$
- Ⓑ $\frac{2}{6}$
- Ⓒ $\frac{3}{6}$
- Ⓓ $\frac{4}{8}$

This question has three parts.

- 15** This diagram shows the floors of a hallway and a closet.



The hallway floor is covered with square tiles, with no gaps or overlaps. Each tile has a side length of 1 foot.

Part A

What is the area, in square feet, of the hallway floor? Show or explain how you got your answer.

Enter your answer and your work or explanation in the space provided.

Part B

The closet floor is in the shape of a rectangle with a length of 3 feet and a width of 4 feet.

Write an equation that can be used to find A , the area, in square feet, of the closet floor.

Enter your equation in the space provided.

Part C

Explain how to find the total area, in square feet, of the hallway floor **and** the closet floor. Be sure to include the total area in your answer.

Enter your answer and your work or explanation in the space provided.

16 A student sold candy bars on Monday, Tuesday, and Wednesday.

- She sold a total of 125 candy bars over the three days.
- She sold 67 candy bars on Monday.
- She sold 19 candy bars on Tuesday.

What is the total number of candy bars the student sold on Wednesday?

- Ⓐ 39
- Ⓑ 58
- Ⓒ 86
- Ⓓ 211

17 Evan used exactly 20 paper clips to make an array.

Which of these could be the array Evan made?




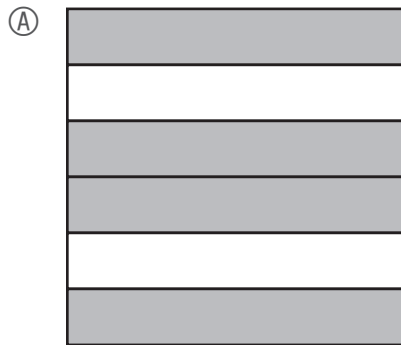
- Ⓐ 2 rows of 20 paper clips
- Ⓑ 4 rows of 6 paper clips
- Ⓒ 5 rows of 4 paper clips
- Ⓓ 10 rows of 10 paper clips

- 18 There are 48 students in a library. The students are working in groups. Each group has 6 students.


Which equation can be used to find n , the number of groups of students working in the library?

- Ⓐ $48 \div 6 = n$
- Ⓑ $n \div 6 = 48$
- Ⓒ $48 \times 6 = n$
- Ⓓ $n \times 48 = 6$

19 Which of these fraction models shows $\frac{5}{8}$ of the model shaded?



- 20 This diagram shows a piece of artwork made with square tiles.



= 1 square foot

What is the total area, in square feet, of the **shaded** part of the artwork?

Enter your answer in the answer boxes at the top of the answer grid **and** completely fill the matching circles.

○	○	○	○	○	○
0	0	0	0	0	0
1	1	1	1	1	1
2	2	2	2	2	2
3	3	3	3	3	3
4	4	4	4	4	4
5	5	5	5	5	5
6	6	6	6	6	6
7	7	7	7	7	7
8	8	8	8	8	8
9	9	9	9	9	9

Grade 3 Mathematics
Spring 2022 Released Operational Items

PBT Item No.	Page No.	Reporting Category	Standard	Item Type*	Item Description	Correct Answer**
1	4	<i>Measurement and Data</i>	3.MD.A.2	SR	Interpret a measurement, in increments of 25, from a diagram of a metric scale.	B
2	5	<i>Operations and Algebraic Thinking</i>	3.OA.A.2	SR	Determine which word problem can be solved using a given division equation.	D
3	6	<i>Measurement and Data</i>	3.MD.B.4	SR	Create a line plot from a given set of data.	D
4	7	<i>Number and Operations in Base Ten</i>	3.NBT.A.1	SR	Round three-digit whole numbers to the nearest hundred.	A,D,E
5	8	<i>Number and Operations-Fractions</i>	3.NF.A.2	CR	Plot points to show the location of fractions on a given partitioned number line and give instructions on how to determine where to plot a fraction greater than one on a given partitioned number line.	
6	9	<i>Operations and Algebraic Thinking</i>	3.OA.A.4	SR	Determine which whole numbers will make given division and multiplication equations true.	A,D,F
7	9	<i>Number and Operations-Fractions</i>	3.NF.A.3	SR	Identify the fractional equivalent of a given whole number.	B
8	10	<i>Operations and Algebraic Thinking</i>	3.OA.B.6	SR	Determine the multiplication equation that can be used to help solve a given division equation.	D
9	11	<i>Geometry</i>	3.G.A.2	SR	Identify the shaded areas of shapes that represent a given fraction.	A,D
10	14	<i>Number and Operations in Base Ten</i>	3.NBT.A.3	SR	Solve a word problem by multiplying a single-digit whole number by a multiple of 10.	A
11	15	<i>Operations and Algebraic Thinking</i>	3.OA.D.9	SA	Identify the next term in a given subtraction pattern.	52
12	16	<i>Number and Operations in Base Ten</i>	3.NBT.A.1	SR	In a real-world problem, select numbers that, when rounded to the nearest hundred, will equal a specified number.	C,E
13	16	<i>Geometry</i>	3.G.A.2	SR	Determine the fraction that represents one part of a given circle that is divided into equal parts.	A
14	17	<i>Number and Operations-Fractions</i>	3.NF.A.3	SR	From a given set of fractions, determine the fraction that is not equivalent to the other fractions.	B
15	18–19	<i>Measurement and Data</i>	3.MD.C.7	CR	Determine the area of rectangles by counting squares or by multiplying the length times the width, and then determine the total area of a rectilinear figure.	
16	20	<i>Operations and Algebraic Thinking</i>	3.OA.D.8	SR	Solve a two-step word problem involving addition and subtraction.	A
17	21	<i>Operations and Algebraic Thinking</i>	3.OA.A.1	SR	Determine how a two-digit product can be expressed as equal groups of equal numbers of objects.	C
18	22	<i>Operations and Algebraic Thinking</i>	3.OA.A.3	SR	Determine the multiplication or division equation that can be used to solve a given word problem.	A
19	23	<i>Number and Operations-Fractions</i>	3.NF.A.1	SR	Determine the fraction model that represents a given fraction in the form $\frac{a}{b}$.	D
20	24	<i>Measurement and Data</i>	3.MD.C.6	SA	Determine the area of an irregular shape by counting the square tiles that cover it.	23

* Mathematics item types are: selected-response (SR), short-answer (SA), and constructed-response (CR).

** Answers are provided here for selected-response and short-answer items only. Sample responses and scoring guidelines for any constructed-response items will be posted to the Department’s website later this year.

Grade 3 Mathematics
Spring 2022 Unreleased Operational Items

PBT Item No.	Reporting Category	Standard	Item Type*	Item Description
21	<i>Number and Operations-Fractions</i>	3.NF.A.1	SR	Determine the fraction that is represented by a given fraction model.
22	<i>Measurement and Data</i>	3.MD.D.8	SR	Given shapes and their dimensions, determine which shape has a specified perimeter and has the largest area.
23	<i>Operations and Algebraic Thinking</i>	3.OA.C.7	SR	Identify a division expression that will have a given quotient.
24	<i>Measurement and Data</i>	3.MD.C.5	SR	Determine the correct statement relating square units to the area of a given figure.
25	<i>Measurement and Data</i>	3.MD.A.1	SR	Measure a time interval given a start and end time shown on two different digital clocks.
26	<i>Geometry</i>	3.G.A.1	SR	Identify the mathematical names of shapes that share two given attributes.
27	<i>Number and Operations-Fractions</i>	3.NF.A.3	SR	Identify a fraction that is equivalent to a given fraction when both fractions are represented by models.
28	<i>Operations and Algebraic Thinking</i>	3.OA.D.9	CR	Identify a given subtraction pattern, extend another pattern using the same rule, and use properties of odd and even numbers to describe similar features in the two patterns.
29	<i>Geometry</i>	3.G.A.1	SR	Determine which shapes are a specific type of quadrilateral.
30	<i>Measurement and Data</i>	3.MD.C.7	SR	Determine two expressions that can be used to find the area of a rectangle using the distributive property.
31	<i>Number and Operations in Base Ten</i>	3.NBT.A.3	SR	Solve a word problem by multiplying a single-digit whole number by a multiple of 10.
32	<i>Number and Operations-Fractions</i>	3.NF.A.1	SR	Determine which fraction model represents a given fraction.
33	<i>Measurement and Data</i>	3.MD.C.7	SR	Determine the equation that can be used when decomposing a rectilinear figure to find the total area.
34	<i>Operations and Algebraic Thinking</i>	3.OA.B.6	SR	Determine the multiplication equation that can be used to solve a division word problem.
35	<i>Operations and Algebraic Thinking</i>	3.OA.B.5	SA	Determine the missing factor that can be used with the distributive property to find equivalent products.
36	<i>Number and Operations-Fractions</i>	3.NF.A.2	SR	Identify the point on a partitioned number line that represents the location of a unit fraction.
37	<i>Number and Operations in Base Ten</i>	3.NBT.A.2	CR	Solve word problems involving addition and subtraction with three-digit whole numbers.
38	<i>Operations and Algebraic Thinking</i>	3.OA.A.3	SR	Use an array to identify a multiplication equation that matches a division equation.
39	<i>Measurement and Data</i>	3.MD.B.3	SR	Solve a one-step "how many more" problem using a given bar graph.
40	<i>Geometry</i>	3.G.A.1	SR	Identify the true statements about attributes of three types of quadrilaterals.

* Mathematics item types are: selected-response (SR), short-answer (SA), and constructed-response (CR).